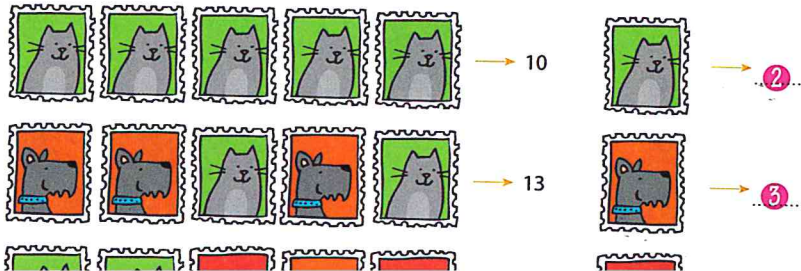


4 hoeveel is elk dier nu waard?



4	1	7
5	9	3

1	1	7
5	4	3

3	1	4
4	5	1

3	3	2
6	4	1

3	4	5	6
4	3	1	2
3	7	8	2
2	1	3	6

5	1	3	0
2	9	4	3
1	4	5	7
2	2	6	3

4	6	5	1
4	3	1	3
1	3	2	5
1	1	7	1

bedenk er zelf ook een.

1	3	6	3	9
2	3	4	4	1
4	5	1	3	8
4	2	6	2	2
7	3	1	4	5

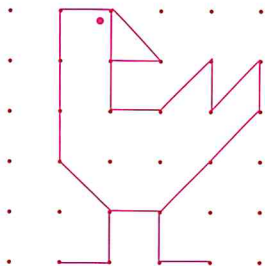

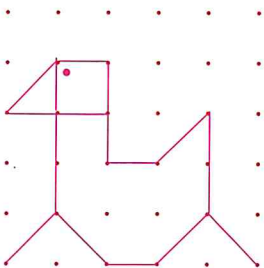
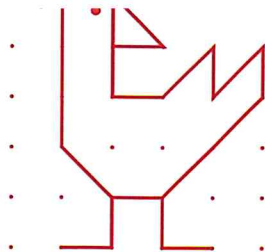
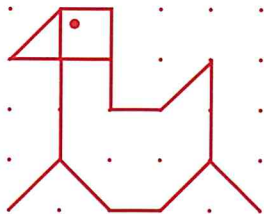
2	2	4	1	9
1	6	6	6	3
3	2	3	4	5
2	3	2	3	2
2	7	3	4	1

2 zoek samen 20. kleur.

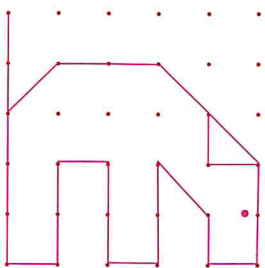
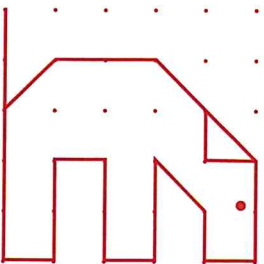
3	4	5	6	7	8
9	8	6	7	8	9
8	4	9	7	5	3
6	4	5	5	4	2
6	4	5	5	8	6
8	2	8	2	1	9

bedenk er zelf ook een.






c



zo moet het:



2	3	5
2	6	2

3	3	5	
3	2	1	5

nu jij:

2	6	1
3	3	7

10	1	1
7	2	3

8	4	3
3	2	2

4	9	2	6
2	7		

11	2	7
3	12	5

2	7	3	10
1	5	4	6

2 aan beide kanten evenveel. trek een lijn.

3	7	1
3	3	1

4	4	5
5	2	2

1	5	2
5	3	6

5	6	4
5	2	2




5	4	3
6	5	7

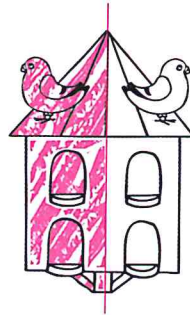
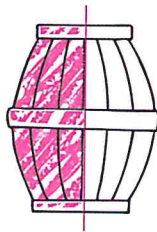

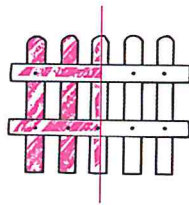

8	6	3
7	1	7

2	7	9
9	4	5

5	6	5
7	8	9

3 bedenk er nu zelf 3.





3 kleur de helft.

kan op verschillende manieren

kleur .ie ook

